

# Numbers to 1,000,000

1. Complete the place value charts to represent the numbers below.

A. 874,319

100,000s	10,000s	1,000s	100s	10s	1s
●●●●● ●●●●●	●●●●●	●●●●●			

B. 759,134

100,000s	10,000s	1,000s	100s	10s	1s
				●●●●●	●●●●●

VF

4. Mark is reading the number 604,406.

He says,

Six hundred and forty thousand, four hundred and sixty.



Mark

Is he correct? Explain your answer.

R

2. Draw two more lines to match 945,000 to other numbers of the same value

945,000

945 thousands

9,450 tens

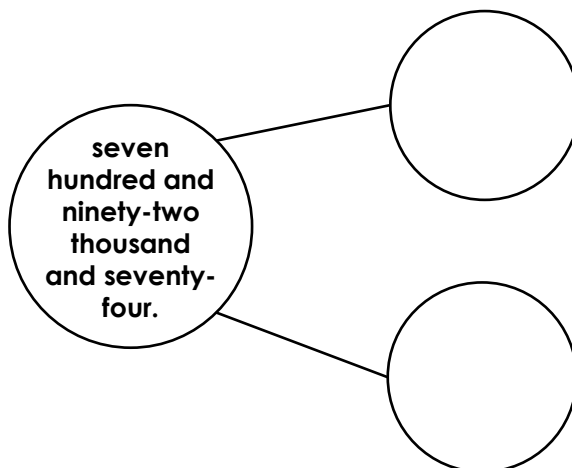
94,500 tens

945,000 ones

954 hundreds

VF

5. Complete the part-whole model. Find at least two different solutions.



PS

3. Complete the bar models below using the place value of each digit in the numbers.

806,574				
800,000		500		

492,037				
	90,000			7

973,502				
	70,000	3,000		

VF

6. Using the digit cards and following the rules below, make a 6-digit number.



The ones, tens and hundreds columns each contain an even digit.

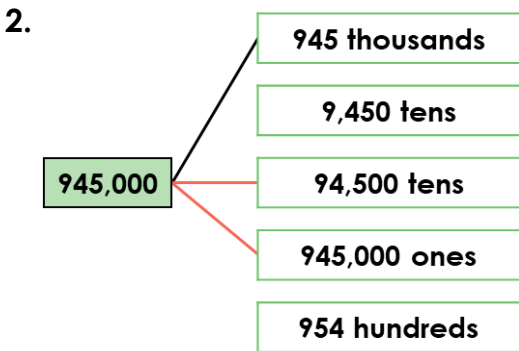
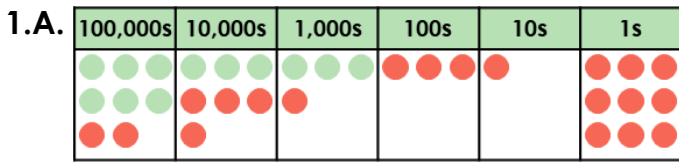
The ones digit is equal to the sum of the tens and hundreds digits.

The smallest digit is in the thousands.

The difference between the hundred thousand column and the ten thousand column is equal to the hundreds column.

PS

# Numbers to 1,000,000



3.

806,574				
800,000	6,000	500	70	4

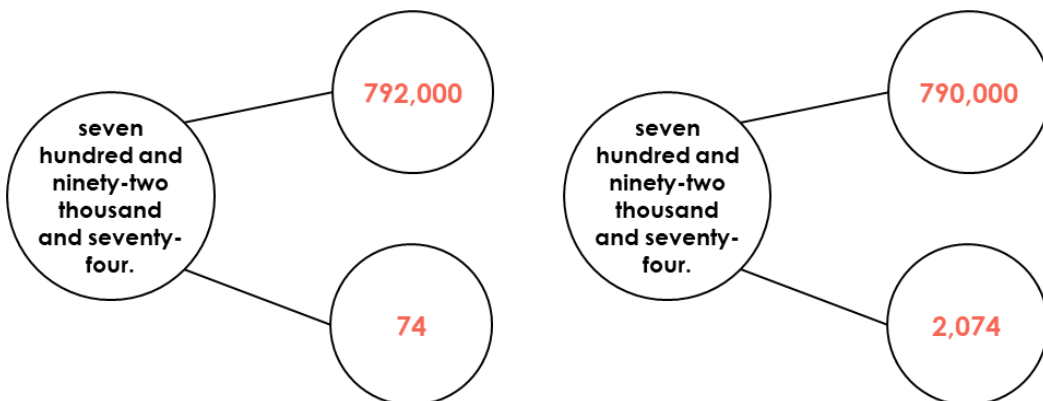
492,037				
400,000	90,000	2,000	30	7

973,502				
900,000	70,000	3,000	500	2

4. Mark is incorrect. He has read the '4' in the ten thousand column instead of the thousand column and the '6' in tens column instead of the ones column. He should have said six hundred and four thousand, four hundred and six.

5. Various answers, for example:



6. 371,426 or 731,426