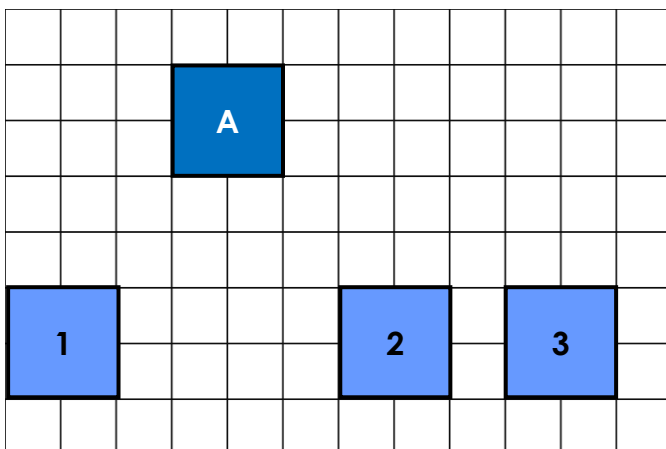


Translation

1. Which translation of Shape A has been translated 6 right and 4 down. Put an 'X' by the correct number.

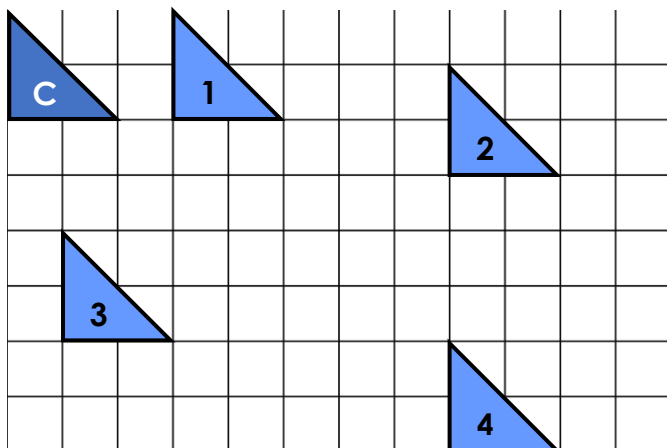


1	
---	--

2	
---	--

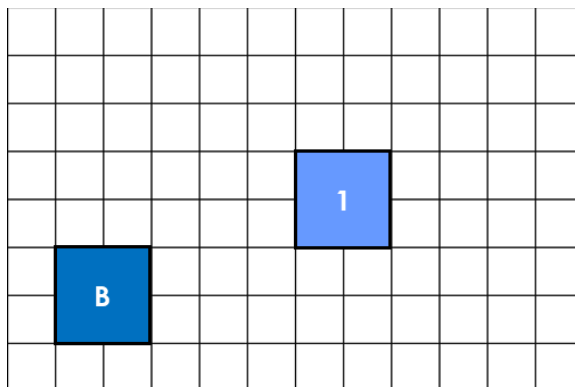
3	
---	--

2. Shape C has been translated four times. Write the translation for each.



3. Imogen has translated Shape B 5 right and 2 up.

If I switch the numbers around, Shape B will still arrive at the position of Shape 1.



Do you agree? Explain your answer.