

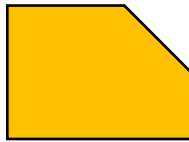
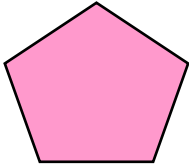


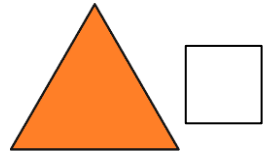
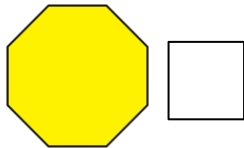
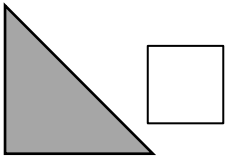
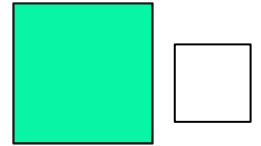
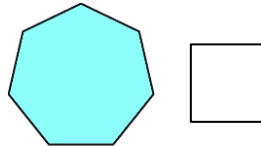
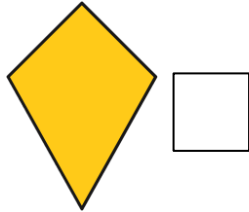
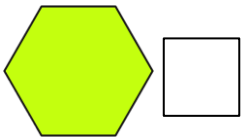
# Regular and Irregular Polygons

1. Using your knowledge of regular and irregular polygons, complete the 'Number of Sides' row. Then draw lines to match the shapes to the correct section of the table.

	Irregular Hexagon	Regular Pentagon	Irregular Pentagon	Regular Quadrilateral
Number of sides				
Shape				



2. Put an 'X' next to the regular polygons.



3. Has Shamir sorted these shapes correctly? Explain your answer.

	Regular Polygon	Irregular Polygon
Has exactly 5 sides	 <b>A</b>	 <b>D</b>
Not 5 sides	 <b>B</b> <b>C</b>	 <b>E</b>