

Subtracting – Different Decimal Places

1. Fill in the missing digits to make the calculations correct.

A.

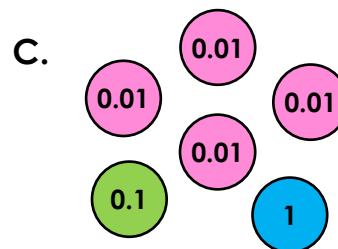
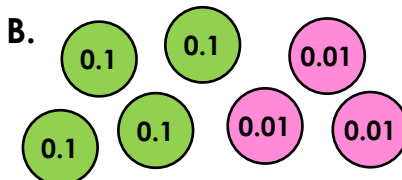
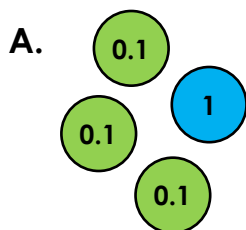
		.	3	3	
–	6	.	1	2	
2	.		0	2	

B.

	9	.	2	1	
–		.	3		
5	.	9	0	6	

2. Circle the group of counters that represents the answer to the question below.

$4.03 - 3.6 =$



3. Solve the word problems below.

A. A scientist measured the temperature of two liquids as 4.163°C and 2.5°C . What is the difference between the temperatures?

B. A small dog weighed 4.25kg . After a week, the same dog weighed 4.117kg . How much weight had the dog lost?

C. Kit ran 4.8km . Harris ran 5.54km . How much further does Harris run?