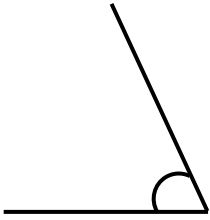


Monday - Measuring with a Protractor

1. Match the angles to the correct labels.

A.



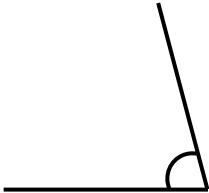
75°

B.

35°



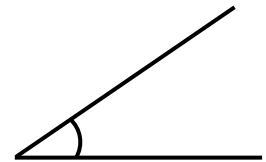
C.



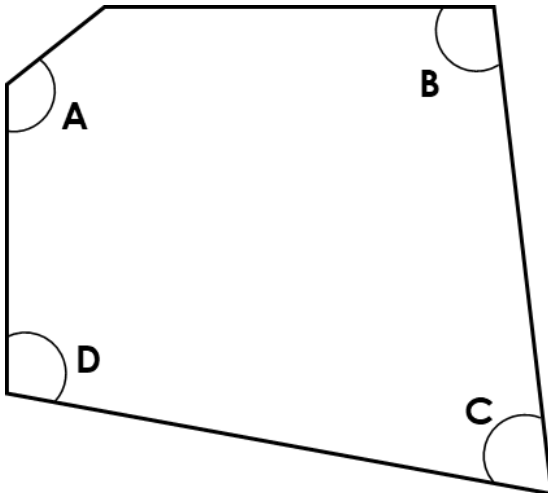
65°

D.

15°



2. Measure the angles in the shape below.



A =

B =

C =

D =

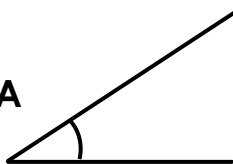
3. Who is correct? Explain the error the other person may have made.

Hadassah says,

Angle A is 35°
and angle B is
80°.




A



Naomi says,

Angle A is 33°
and angle B is
85°.



B

