
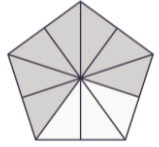
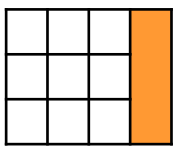



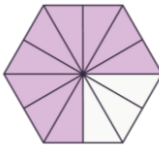
Equivalent Fractions


Arrange the loop cards so that each fraction is matched to an equivalent fraction. Complete the incomplete fractions and fill in the blank card to finish the loop.


| | |
|---|---|
| $\frac{25}{21}$  |  |
|---|---|

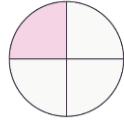
| | |
|----------------|---|
| $\frac{6}{18}$ |  |
|----------------|---|

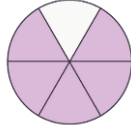
| | |
|-----------------|---------------|
| $\frac{24}{30}$ | $\frac{5}{8}$ |
|-----------------|---------------|

| | |
|---|---|
|  $\frac{21}{21}$ |  |
|---|---|

| | |
|-----------------|---|
| $\frac{12}{20}$ |  |
|-----------------|---|

| | |
|-----------------|---|
| $\frac{18}{24}$ |  |
|-----------------|---|

| | |
|--|---------------|
|  | $\frac{2}{7}$ |
|--|---------------|




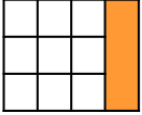

| | |
|-----------------|---|
| $\frac{21}{30}$ |  |
|-----------------|---|


| | |
|--|--|
| | |
|--|--|

Equivalent Fractions

Arrange the loop cards so that each fraction is matched to an equivalent fraction. Complete the incomplete fractions and fill in the blank card to finish the loop.

Various answers, for example:


$$\frac{15}{18}$$
$$\frac{12}{20}$$

$$\frac{6}{18}$$

$$\frac{2}{7}$$

$$\frac{21}{30}$$

$$\frac{40}{25}$$
$$\frac{8}{5}$$
$$\frac{30}{24}$$

$$\frac{24}{18}$$
$$\frac{6}{21}$$
