



Decimals as Fractions 1

1. Colour the 100 squares to show the decimals below as fractions.



$$= \frac{\square}{\square} \text{ or } \frac{\square}{\square}$$

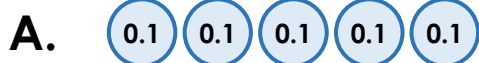
A. 0.25



$$= \frac{\square}{\square}$$

B. 0.7

2. Match the visual representation to the decimal and the fraction it shows.



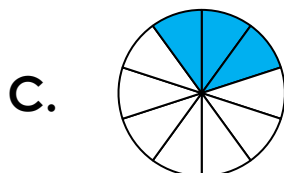
0.5

$\frac{1}{5}$



0.3

$\frac{1}{2}$



0.2

$\frac{30}{100}$

3. True or false? Explain your reasoning.

The image shows the decimal 2.5 and the fraction $\frac{25}{100}$.

