

Adding – Same Decimal Places


1. Complete the addition calculations using the digits on the digit cards.

A.


$$\begin{array}{r}
 2 \ . \ 5 \ 9 \\
 + \ 4 \ . \ 1 \ 9 \\
 \hline
 6 \ . \ \square \ \square \\
 \hline
 \end{array}$$

B.

$$\begin{array}{r}
 5 \ . \ 3 \ 7 \\
 + \ 3 \ . \ 5 \ 4 \\
 \hline
 8 \ . \ \square \ \square \\
 \hline
 \end{array}$$



2. Use the numbers below to complete the number sentences. You can only use each number once.




A. + = 9.77

B. + = 9.77

C. + = 9.77

3. Sir Kevin can carry a total of 8.89kg. Which gems will he be able to take with him?



My sword weighs 1.06kg, my shield weighs 2.65kg and my armour weighs 4.11kg.

