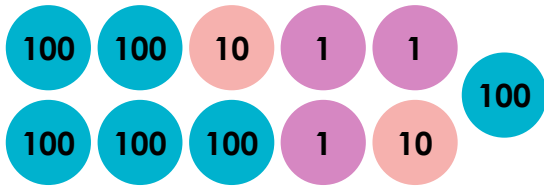



# Represent Numbers to 1,000

1. Match the representation to the correct value.



A. seven hundred and twenty



B. six hundred and twenty-three



C. five hundred and eight

VF

2. Identify and represent the value described by each character.



Gracie

A number greater than 692 but less than six hundred and ninety-four.



Haleema

A number with 7 hundreds, zero tens and three more ones than four.



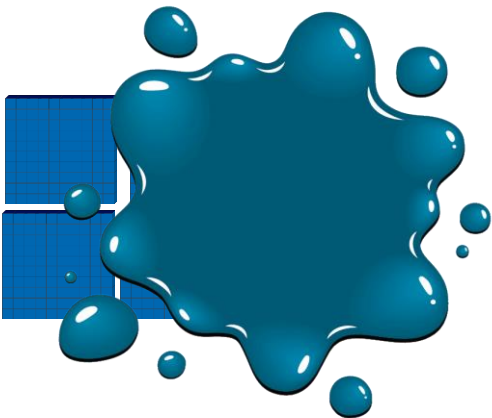
Charlie

A number with zero ones, eight tens and two more hundreds than seven.

VF

3. Oliver has dropped paint on part of his representation.

Using his clues, investigate three different possibilities for his number and draw the representations.

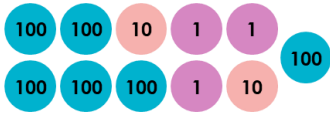


My number has an odd number of hundreds, zero tens and an even number of ones greater than 2.

PS

# Represent Numbers to 1,000

1.



A. seven hundred and twenty

B. six hundred and twenty-three

C. five hundred and eight

2. Gracie: 693; Haleema: 707; Charlie: 980. Accept suitable representations
3. Various answers, for example: 306; 504; 708. Accept suitable representations