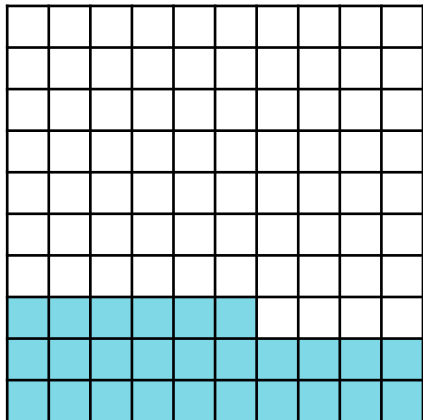


Make a Whole

1. Complete the statement below to describe this hundred square.



$0.2 \underline{\quad} + \underline{\quad} . \underline{\quad} \underline{\quad} = 1$

VF

4. Seth's class are learning about making a whole. He says,

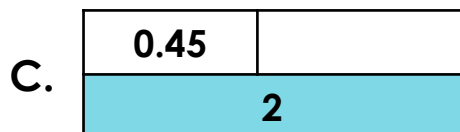

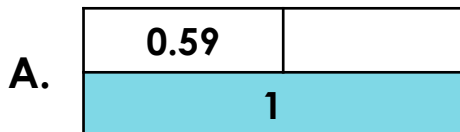


If I have 0.38, I need to add on 0.72 to make a whole.

Is Seth correct? Explain why.

R

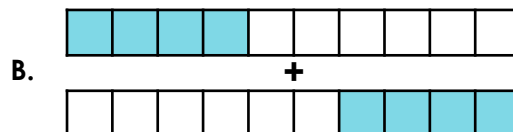
2. Find the missing value in each bar model.



VF

5. Which representation is the odd one out?

A. **0.36 and 0.64**

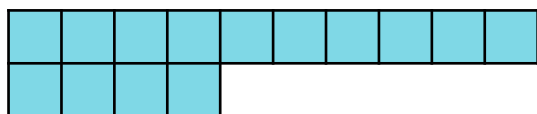


C. **0.09 and 0.91**

Explain your answer.

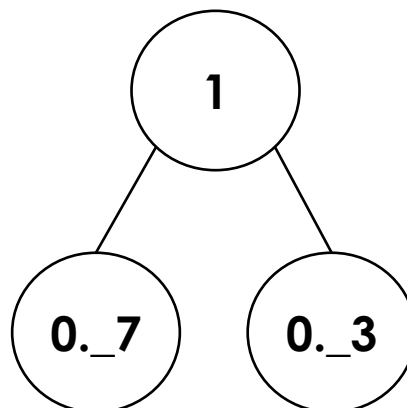
R

3. How many more hundredths need to be added to the image below to make one whole?



VF

6. Complete the part-whole model below.



Find three different solutions.

PS

Make a Whole

1. $0.26 + 0.74 = 1$
2. A. 0.41; B. 0.19; C. 1.55
3. 86 hundredths
4. Seth is incorrect, he has not used number bonds to 100 to make one whole. He needs to add 0.62 as 0.38 and 0.62 make one whole.
5. B is the odd one out because it represents $0.4 + 0.4 = 0.8$, whereas A and C both represent calculations which make one whole.
6. Various answers, for example: $0.\underline{0}7 + 0.\underline{9}3$; $0.\underline{6}7 + 0.\underline{3}3$; $0.\underline{4}7 + 0.\underline{5}3$