

Divide 1 and 2 Digits by 10

1. Match each calculation to the correct answer.

A.

$$47 \div 10 =$$

B.

$$4 \div 10 =$$

C.

$$74 \div 10 =$$



ones	tenths
7	4

ones	tenths
4	7

ones	tenths
0	4

2. Complete the calculations. Use digits to show your answers.

A.

tens	ones	tenths	hundredths
			

$$\div 10 =$$

tens	ones	tenths	hundredths


B.

tens	ones	tenths	hundredths
5	9		

$$\div 10 =$$

tens	ones	tenths	hundredths

C.

tens	ones	tenths	hundredths
			

$$\div 10 =$$

tens	ones	tenths	hundredths

3. Christina is completing the division calculation using a Gattegno chart. Explain Christina's mistake. What is the correct answer?

$$81 \div 10 =$$



I have shown my working out but I have made a mistake.

10	20	30	40	50	60	70	80	90
1	2	3	4	5	6	7	8	9
0.1	0.2	0.3	0.4	0.5	0.6	0.7	0.8	0.9