

# Telling the Time to 5 Minutes

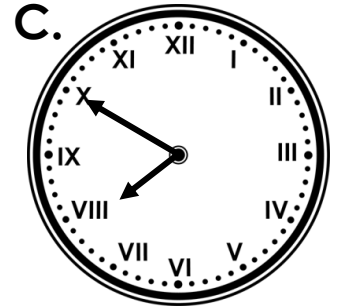
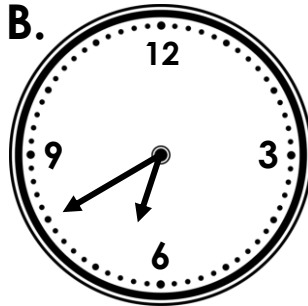
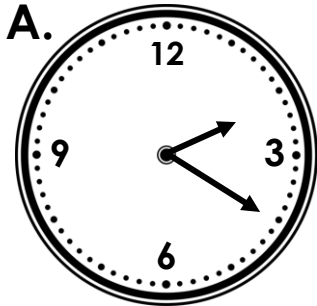
1. Match each clock to the correct time.

20 minutes to 7

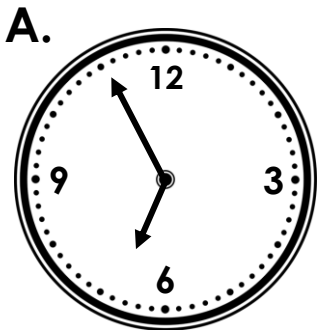
20 minutes past 2

10 minutes past 8

10 minutes to 8



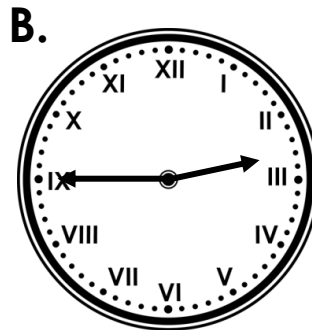
2. Circle the time that each clock shows.



5 minutes to 7

5 minutes to 8

5 minutes past 7



10 minutes to 3

Quarter past 3

Quarter to 3

3. Julie is explaining where the clock hands should be to show the time 10 minutes to 9. Is she correct? Draw lines on the blank clock to help you explain your answer.



The minute hand is close but not on the 9 and the hour hand is on the 10.

