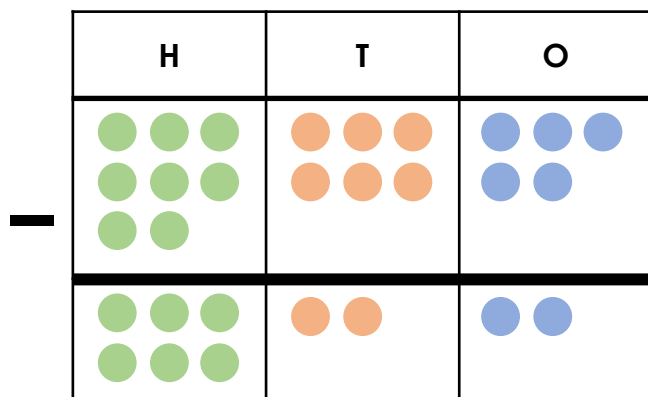


Subtract 3-Digits from 3-Digits 2

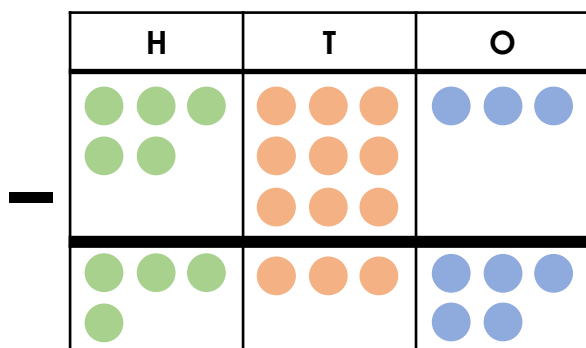
1. The following subtraction is incorrect. True or false?



Subtract
247

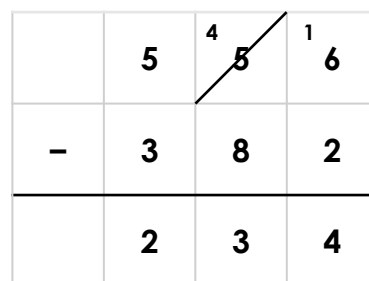
2. Find the mistake in one of the questions below.

A.



Subtract
158

B.



3. Which description matches each of the calculations below? Prove it.



My calculation has been exchanged incorrectly.



My calculation exchanges from the hundreds column.



My calculation exchanges from the tens column.

