



Represent Numbers to 100

1a. Fill in the blanks for each set of straws.



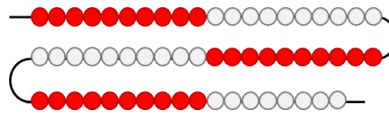
A. There is ____ ten and ____ ones.
The number is ____.



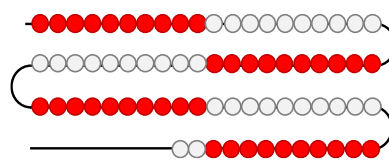
B. There are ____ tens and ____ ones.
The number is ____.

VF

1b. Fill in the blanks for each bead string.



A. There are ____ tens and ____ ones.
The number is ____.



B. There are ____ tens and ____ ones.
The number is ____.

VF

2a. Draw each of the numbers below using lines and dots to represent tens and ones.

A. 2 tens and 8 ones

B. 46

C. fifty-three

D. 72

VF

2b. Draw each of the numbers below using lines and dots to represent tens and ones.

A. 17


B. 3 tens and 5 ones


C. 64

D. eighty-one

VF

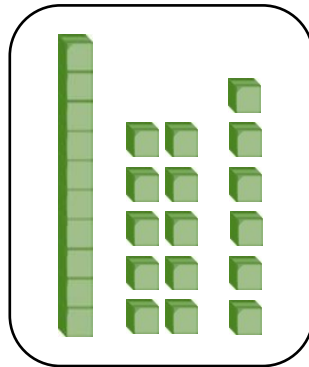
3a. Which numbers are shown below?






VF

3b. Which numbers are shown below?





VF

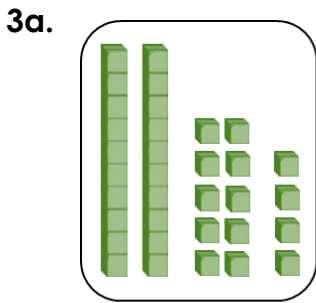


Represent Numbers to 100

1a. A. There is 1 ten and 9 ones. The number is 19.


B. There are 3 tens and 5 ones. The number is 35.

1b. A. There are 5 tens and 8 ones. The number is 58.

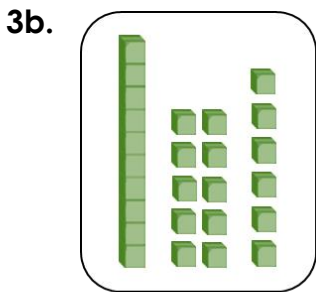
B. There are 7 tens and 2 ones. The number is 72.




34



40



26



43