



# Numbers to 1,000


1. Match the blocks to the numbers.



160



238




306


2. Complete the number track below.

606	607		609	
-----	-----	--	-----	--

3. What number does the image below represent?



4. Fill in the missing digits.




=      2     

5. Write as many 3-digit numbers as you can using these digit cards.



6. Shabana says,

I have made 408.



Do you agree? Explain your answer.

7. Model A is the same as Model B. Do you agree? Explain why.

