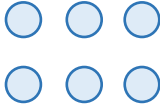









Add Two 3-Digit Numbers

1. Add the numbers in the place value chart below. Circle the correct answer.

	H	T	O
+	3		8
		4	

- A. 807
- B. 816
- C. 817
- D. 718

2. Fill in the missing gaps in the place value chart with the correct digits below to complete the addition.

	H	T	O
+			
			
		8	

3. Sanjay and Lucie have both worked out the addition shown below. Whose calculation is incorrect? Explain why.



	3	9	5
+	2	6	4
	6	6	9
	1		

	3	9	5
+	2	6	4
	6	5	9
	1		

