



Tens and Ones

1. Choose the representations that show 64.

A.



B.

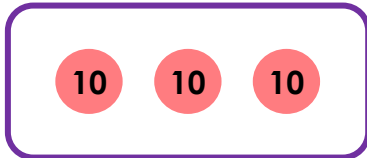


C.

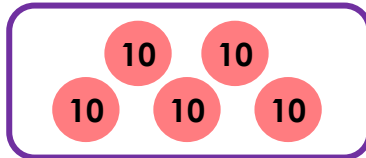
6 tens and 4 ones

2. Match the pairs together to make 63.

A.



B.

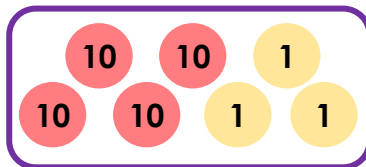


C.

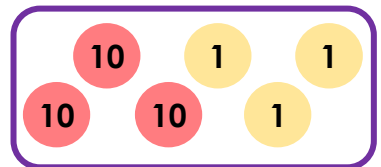
2 tens

13 ones

1.



2.

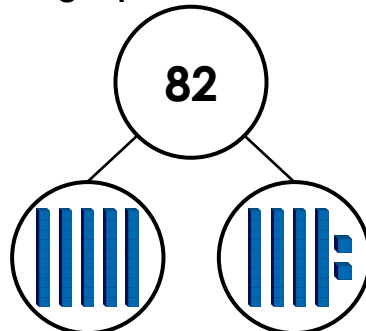
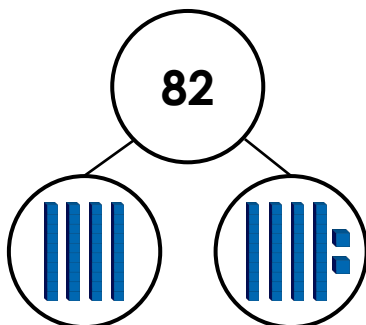


3.

3. Rex and Selina are making the number 82 using a part-whole model.



Rex



Selina

Who is correct? Explain your answer.