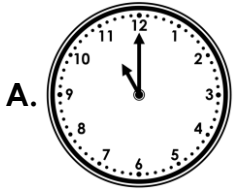
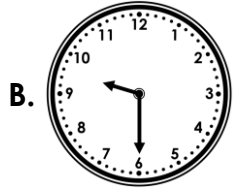


# O'clock and Half Past

1. Match the clocks to the correct written time.



half past 9



6 o'clock

half past 6

11 o'clock

VF

4. Jane reads the time on the clock.



She says,

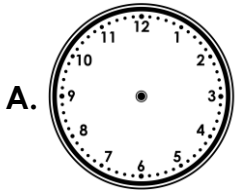


The time must be between 5 o'clock and 7 o'clock.

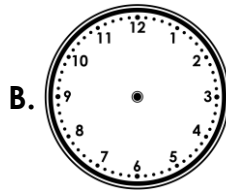
Is Jane correct? Explain how you know.

R

2. Draw the missing hands on each clock to show the correct time.



4 o'clock



half past 7

VF

5. The time is half past 3, but the hands have fallen off the clock!

Three children have tried to fix it.



Peter



Robert


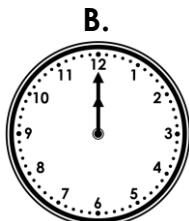
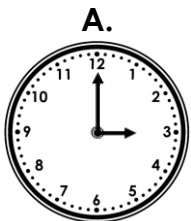


Saskia

Who is correct? Explain why

R

3. Match the clocks to the things you might do at that time.




go to bed

finish school

eat lunch

VF

6. Alice is giving some clues to describe the time.



The hour hand is between the 3 and 7. The minute hand is pointing to the 6.

What time could Alice be describing?

PS

# O'clock and Half Past

1. A. 11 o'clock; B. half past 9



3. A. finish school; B. eat lunch; C. go to bed

4. Jane is incorrect. The minute hand is between 5 and 7, not the hour hand. The hour hand is between 10 and 11. The correct time is half past 10.

5. Robert is correct. He has positioned the minute hand at 6, and the hour hand between 3 and 4.

6. Various answers, for example: half past 3, half past 4, half past 5, half past 6