

Numbers to 20

1a. Is Toby correct? Explain why.



Hassan



My number is bigger as I have more pieces.



Toby

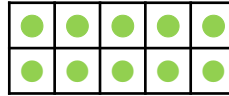


R

1b. Is Polly correct? Explain why.



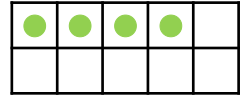
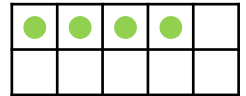
Jack



My number is bigger as I have used 2 tens frames.



Polly



R

2a. Tilly has written the numbers 11 to 15. Explain her mistake.

11	eleven
12	twelve
13	thirteen
14	fourteen
15	five teen

R

2b. Sven has written the numbers 16 to 20. Explain his mistake.

16	sixteen
17	seventeen
18	eighteen
19	nineteen
20	tw teen

R

3a. Ifat is thinking of a number.

She says,



My number is bigger than 10 but smaller than 14. It is made up of 1 ten and more than 2 ones.

What number is she thinking of?

PS

3b. Barry is thinking of a number.

He says,



My number is smaller than 20 but bigger than 14. It is made up of 1 ten and more than 8 ones.

What number is he thinking of?

PS

Numbers to 20

- 1a. Toby is incorrect. Hassan has 1 ten and 2 ones (12) and Toby has 4 ones (4).
- 1b. Polly is incorrect. Polly has not filled the tens frame before starting another. She has represented 8, whereas Jack has represented 10.
- 2a. Tilly has written 'fiveteen' rather than 'fifteen'.
- 2b. Sven has written 'twenteen' rather than 'twenty'.
- 3a. Ifat's number is 13.
- 3b. Barry's number is 19.