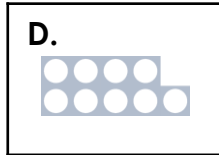
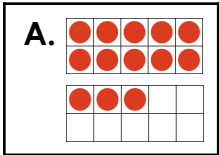



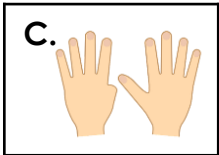
Numbers to 20

1. Join the matching pairs.



B. six

E. 13



VF

4. Complete the loop cards.

	two	
		11

PS

2. Complete the table.

	Numeral	Word
A.		
B.		
C.		

VF

5. What number is Ben describing?

He says,




The number is below 10.
The number word has four letters.

Find 3 possible answers.

PS

3. Write each child's score in numerals and words.



Sam



Milly



Dom

VF

6. Sophie has completed part of a number track.



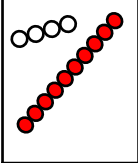
10	11	21	31	41	15	16	17
----	----	----	----	----	----	----	----

Is she correct? Explain your answer.

R

Numbers to 20

1. A and E; B and F; C and D
2. A. 14, fourteen; B. 20, twenty; C. 16, sixteen
3. Sam: 12, twelve; Milly: 10, ten; Dom: 8, eight
4. Various answers, for example:

twelve	two	
	11	
	14	eleven

5. 4, 5, 9
6. Sophie is incorrect. She has written 12, 13 and 14 incorrectly because she has reversed the digits.