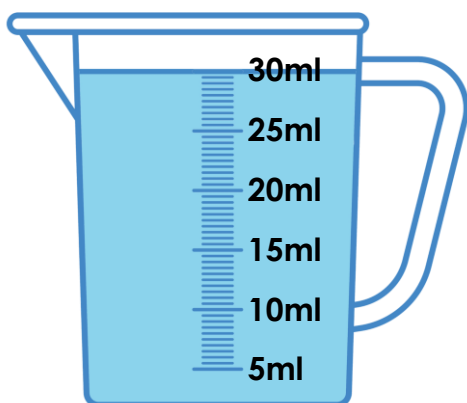


# Millilitres

1. Look at the container below. 15ml is poured into a cup. Circle how much liquid would be left in the container.

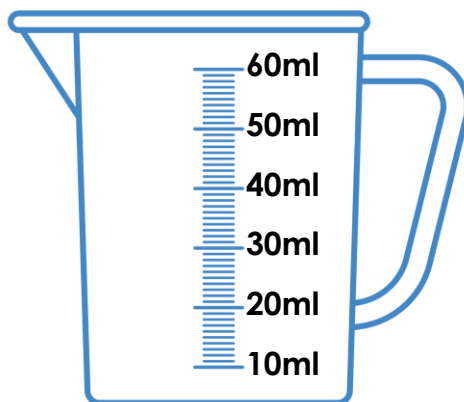


20ml


10ml

15ml

2. Each cup holds 25ml of water. Draw a line on the jug to show how much is needed to fill the cups.



3. Sam is making slime. He needs to mix 45ml of coloured water and 35ml of glue. Is Sam correct? Explain your answer.



I still need to add 10ml of glue.