


Measure Length (cm)

1. How many cubes long is the sweet?



VF

4. Rebecca is measuring the height of a flower.

She says,




The flower is 7 cubes tall.



Explain Rebecca's mistake.


R

2. How many cubes tall is tallest toy animal?



VF

5. Olivia is measuring her pens. She says,



Both pens are 5 blocks long.



Is Olivia correct? Explain your answer.

R

3. Which object is 5 blocks long?



VF

6. A ball is taller than the teddy but shorter than the toy rocket.



How many cubes could the ball measure? Find two possibilities.

PS

Measure Length (cm)

1. 5
2. 6
3. C
4. Rebecca is incorrect as she has not started measuring from the correct place. The base of the flower needs to be at the base of the cubes.
5. She is correct, both pens are 5 blocks long. However, the small pen has been measured with small blocks and the long pen has been measured with long blocks.
6. Various answers, for example: 5 cubes; 6 cubes; 7 cubes