

Compare Mass

1. Put an 'X' next to the statements that are correct.



A. one fox weighs $<$ two frogs


B. two foxes weigh $>$ four frogs

C. one fox weighs $>$ two frogs


2. Order the cards from lightest to heaviest.




A.




B.



C.



D.



3. Billy is comparing strawberries, cherries and apples. He thinks the strawberries are the heaviest. Is Billy correct? Explain how you know.

