

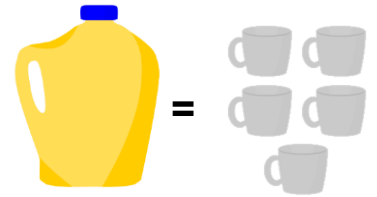
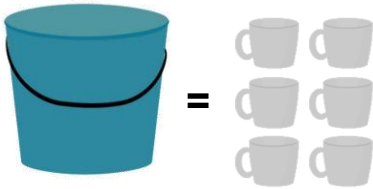


Compare Capacity

1. Use $>$, $<$ or $=$ to complete the statements below.



2. Order the capacity of the containers from smallest to greatest.



A.

B.

C.




3. Sam and Aisha are comparing the total volume of their glasses.




Sam

My glasses have a greater volume because I have four glasses.



Aisha

My glasses have a greater volume because all of my glasses are full.



Who is correct? Explain your answer.