


Bonds to 100 – Tens and Ones

1. Connect the bonds to 100.




1. twenty-six

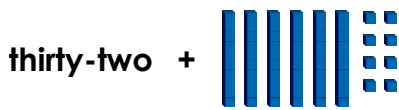
B. 58

2. 39

C. sixty-one



2. Daniel has made a bond to 100.

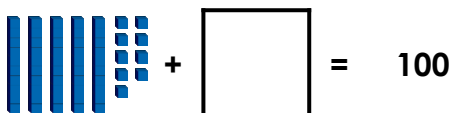


Is he correct?

3. Find 2 bonds to 100 in the grid below.

	87	
75		43

4. Choose the correct number to complete the bond to 100.




41

51

31

5. Ahmed is making bonds to 100.



I have 64.
I need 4 tens and 5 ones
to make 100.

Is he correct? Prove it.

6. Use the digit cards to complete the number bond below.



Rearrange the cards to find two ways.

+ = 100

+ = 100

7. Russ is thinking of a number.



My tens digit and ones
digit are the same.
I need more than five tens
to make a bond to 100.

What could his number be?
Find two possibilities.