





Add and Subtract 10s

1. Calculate the missing digits in the calculations below.

A.

	2	2	
+		0	
<hr/>			
	6	2	
<hr/>			

B.

	7	7	
-		0	
<hr/>			
	5	7	
<hr/>			

2. Chloe had 36p and was given another 40p. Circle the correct calculation.



A.

	3	6
+	4	0
<hr/>		
	1	6
<hr/>		

B.

	3	6
+	4	0
<hr/>		
	7	0
<hr/>		

C.

	3	6
+	4	0
<hr/>		
	7	6
<hr/>		

3. Guy has 73p to spend. Use the digit cards to show what he could have spent at the shop.

	7	3
-		0
<hr/>		
<hr/>		

	7	3
-		0
<hr/>		
<hr/>		



Complete two possible calculations.