
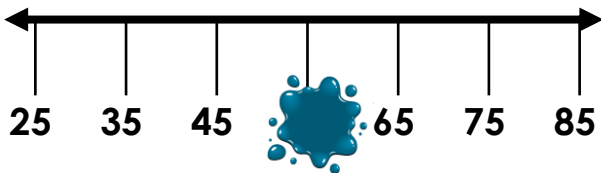


# 10 More and 10 Less

1. What is 10 less than the number below?



2. What is the missing number?



3. Find the missing numbers.

- A. 48 → 10 more →
- B. 56 → 10 less →
- C. 65 → 10 less →
- D. 81 → 10 more →

4. What numbers are missing from the number grid?

33	34	35	36	37
43	44	45		47
53	54	55		57
63	64	65		67

5. Is Solomon correct? Explain your answer.

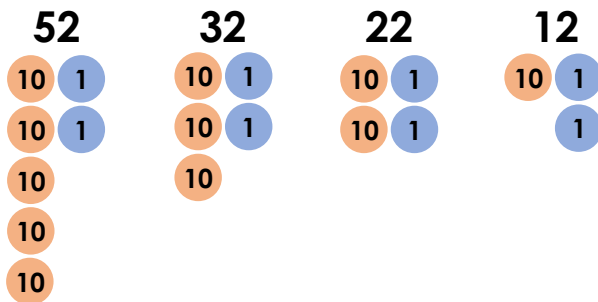


Solomon




My model tower is 52cm tall. If I make it 10cm taller, it will be 63cm tall.

6. Jacob has created a sequence of numbers.

Is he correct? Explain your answer.



7. Each child has chosen a number. Write each child's number in the table below.

 Kerry	My number is 10 more than 76.	
 Tom	My number is 10 less than 22.	
 Alice	My number is 10 more than 57.	

-