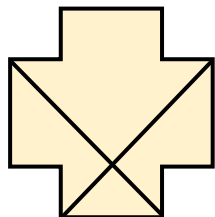


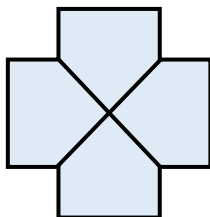
Find a Quarter of a Shape or Object

1. Fill in the gaps with the correct letters.

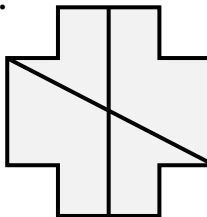
A.



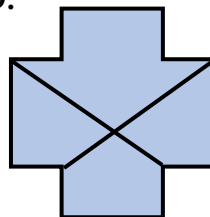
B.



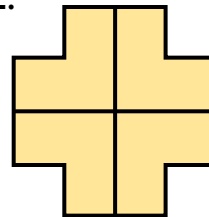
C.



D.



E.




Shapes and are split into quarters.

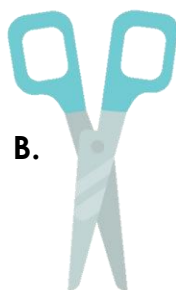
Shapes , and are not split into quarters.

2. Which object below can be split into quarters?

A.



B.

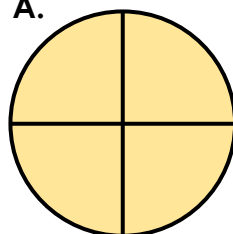


C.

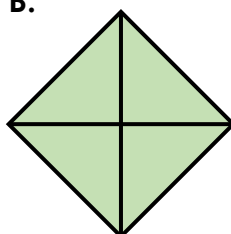


3. Alex thinks he has split the shapes into quarters by drawing 2 lines on each shape.

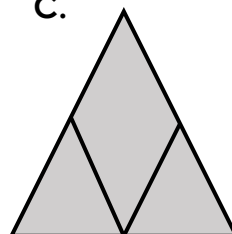
A.



B.



C.



Do you agree with Alex? Explain why.