


# Represent Numbers to 50

1. Use the representation below to complete the sentences.




There are \_\_\_\_ tens.

There are \_\_\_\_ ones.


The number is \_\_\_\_.

4. Which is the odd one out? Explain why.





B. 42

C. forty-two



2. Circle the representation that shows 44.




5. Lily is representing the same number in different ways. What number has Lily made?




3. Match representations that show the same number.

A. thirty-four



C. 42




2. 27



6. Tom is representing a 2-digit number.

forty-two



I have made the number 42 in two different ways.

Do you agree? Explain your answer.