




Recognising Notes

1. Ben thinks there are five £5 notes below. Is he correct?



2. Use $<$, $>$ or $=$ to compare the amounts below.



3. Sue has saved some money. Which notes could she have? Find three possibilities.



I have saved £45. I have two different types of notes.