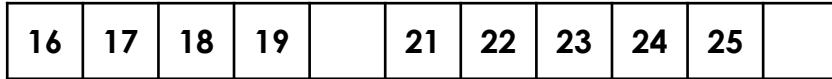

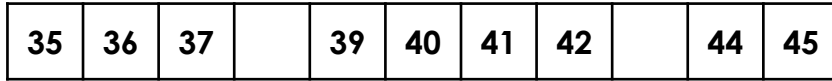
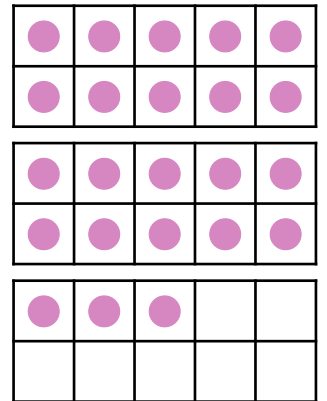



Numbers to 50

Fill in the missing numbers on the number tracks.



Circle the correct number to match each representation.

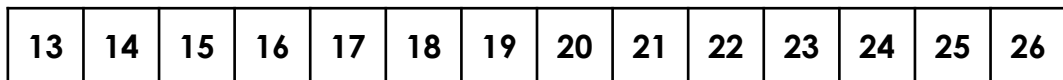


37 47 35

2 21 11

32 20 23

Which number will each child say next?




I count forwards from 13 to 19.



Josie

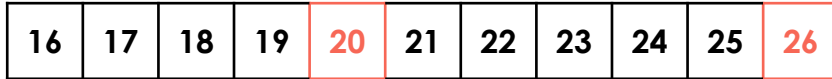
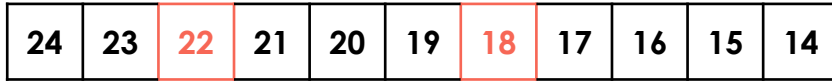
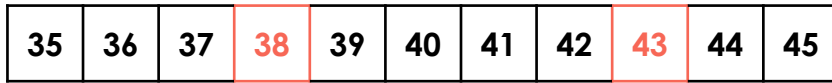
I count backwards from 24 to 17.



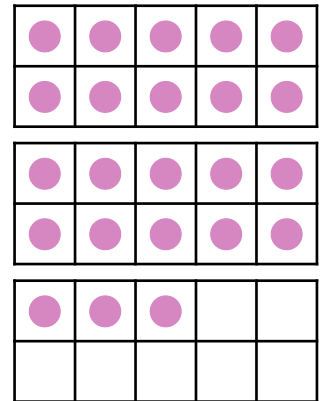

Andy

Numbers to 50

Fill in the missing numbers on the number tracks.



Circle the correct number to match each representation.



37

47

35

2

21

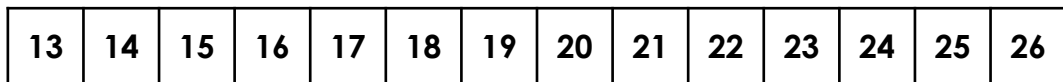
11

32

20

23

Which number will each child say next?



I count forwards from 13 to 19.


20



Josie

I count backwards from 24 to 17.

16



Andy