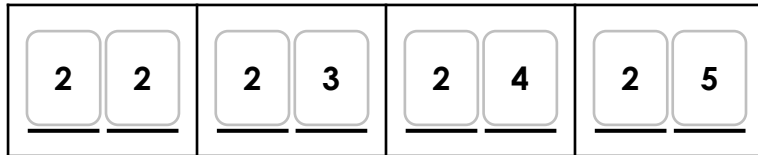

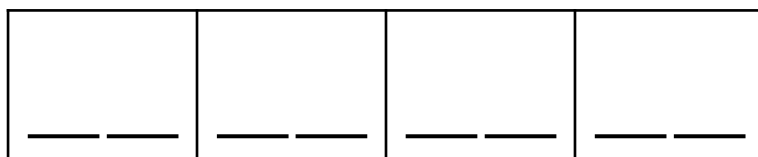
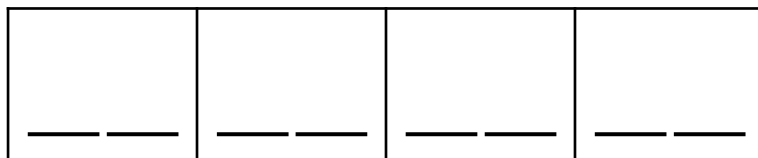
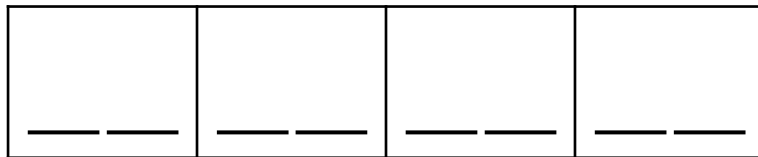


# Numbers to 50

Sally is counting forwards within 50. She uses the digit cards below to create 2-digit numbers for a number track.

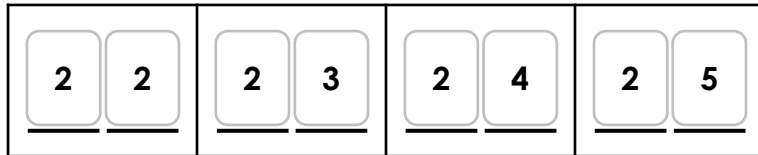


Investigate 4 different ways she can complete the number track using the digit cards. You can use each digit card more than once.



# Numbers to 50

Sally is counting forwards within 50. She uses the digit cards below to create 2-digit numbers for a number track.



Investigate 4 different ways she can complete the number track using the digit cards. You can use each digit card more than once. **Various answers, for example:**

