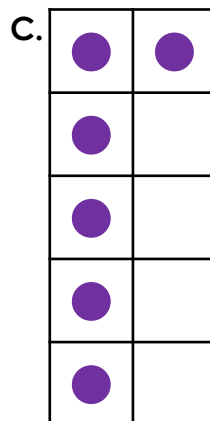
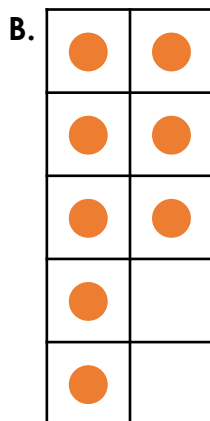
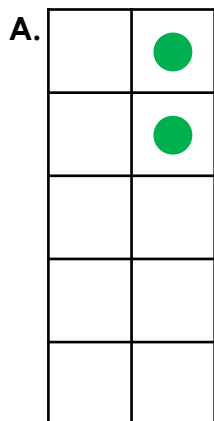


# Finding a Part

1. Draw the missing counters so that each ten frame shows 9.

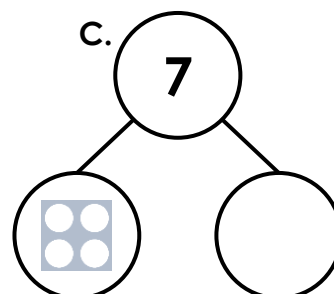
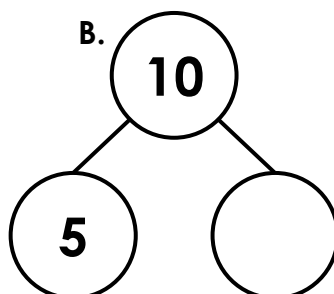
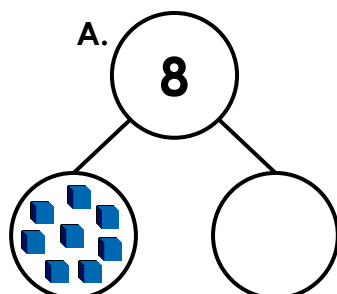


2. Use the digit cards to complete the part-whole models.

5

3

0



3. Jed and Zoya are trying to complete the part-whole model below.



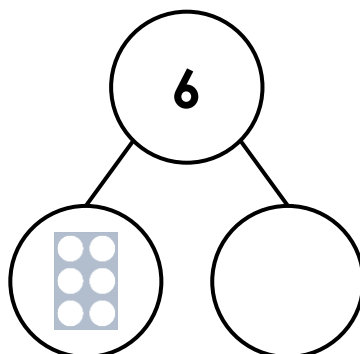
Jed

The missing part is 6.



Zoya

The missing part is 0.



Who is correct? Explain why.