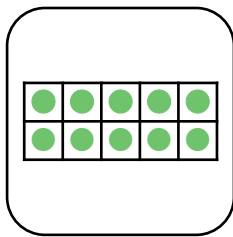



Count in 10s

The cards below all show different representations of 10.




80

$60 - 10$


sixty

$90 + 10$

twenty



90



Choose 6 cards and order them by counting forwards or backwards in 10. Investigate 3 ways to order the cards and complete the templates below.


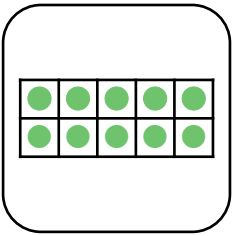


--	--	--	--	--	--

--	--	--	--	--	--

--	--	--	--	--	--

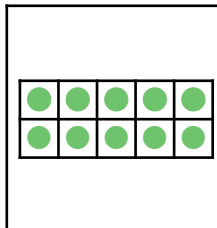


Count in 10s


The cards below all show different representations of 10.




		80	$60 - 10$	sixty
$90 + 10$	twenty		90	

Choose 6 cards and order them by counting forwards or backwards in 10. Investigate 3 ways to order the cards and complete the templates below.

Various answers, for example:

	twenty			$60 - 10$	sixty
-----------------------------------------------------------------------------------	--------	------------------------------------------------------------------------------------	------------------------------------------------------------------------------------	-----------	-------

$90 + 10$	90	80		sixty	$60 - 10$
-----------	----	----	-------------------------------------------------------------------------------------	-------	-----------

	sixty	$60 - 10$			twenty
------------------------------------------------------------------------------------	-------	-----------	-------------------------------------------------------------------------------------	--------------------------------------------------------------------------------------	--------