

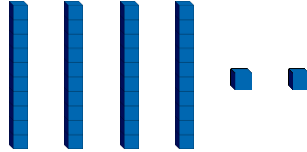




# Compare Objects Within 50


1. Use the symbols  $>$ ,  $<$  and  $=$  to make each statement correct.

A.  ○ thirty-six

B.  ○ 

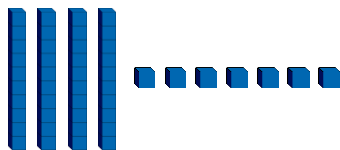
C.  ○ 

2. Complete the statements to compare the groups of objects.



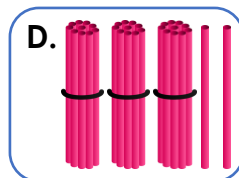
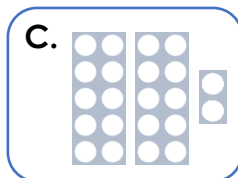
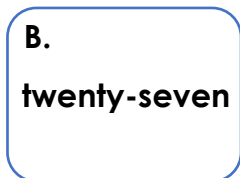

A. Willow has . Theo has .

B.  is more than .



C.  has the most.

3. Complete the statements below by filling in the correct letters.



Find 3 possibilities.

1. \_\_\_\_\_  $>$  \_\_\_\_\_

2. \_\_\_\_\_  $>$  \_\_\_\_\_

3. \_\_\_\_\_  $>$  \_\_\_\_\_