


Compare Mass

1. Choose the correct word to complete the sentence below.




The apple is than the cupcake.

heavier

lighter

4. Put an 'X' next to the incorrect statement.



A. The ball is heavier than the dice.

B. The dice is lighter than the ball.

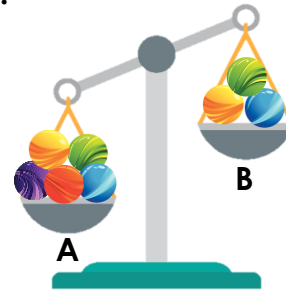
C. The toys are an equal weight.

2. Two pears are an equal weight to four pencils.












How many pencils would one pear weigh?

5. Hettie thinks if she removes one marble from cup A, the scales will be balanced.




Is she correct? Explain your answer.

3. Jo has weighed objects using marbles.

Object	Marbles
Pen	  
Glue Stick	   
Ruler	 

Order the objects from lightest to heaviest.

6. What combination of fruit will balance the scales?



Find 2 possible answers.