
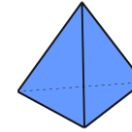
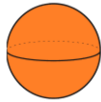
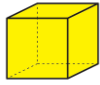


# 3D Shapes

Match each 3D shape to its correct name label.



sphere

cuboid

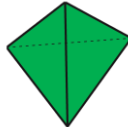
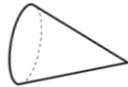

cube

cone

cylinder

pyramid

Use the word bank to label each object with the correct 3D shape name.



sphere

cuboid

cube

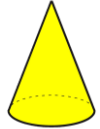
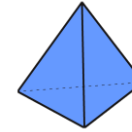
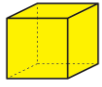
cone

cylinder

pyramid

# 3D Shapes

Match each 3D shape to its correct name label.



sphere

cuboid

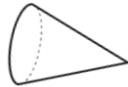

cube

cone

cylinder

pyramid

Use the word bank to label each object with the correct 3D shape name.



pyramid

cone

cuboid

cube

cylinder

sphere



cylinder

cube

pyramid

sphere

cuboid

cone

sphere

cuboid

cube

cone

cylinder

pyramid